

Delhi Police [Constable]

Previous Year Paper

Section : Part A- General Knowledge or Current Affairs

Q.1 आर्थिक मामलों की मंत्रिमंडलीय समिति (CCEA) ने विपणन सत्र 2020 - 2021 हेतु A ग्रेड वाले धान के लिए _____ प्रति कुंतल न्यूनतम समर्थन मूल्य (MSP) निर्धारित किया है।

- Ans
- 1. ₹1,868
 - 2. ₹1,888
 - 3. ₹2,150
 - 4. ₹2,640

Question ID : 6549783379
Status : Not Answered
Chosen Option : --

Q.2 The first session of the Indian National Congress was held at _____ in 1885.

- Ans
- 1. Bombay (Now Mumbai)
 - 2. Allahabad (Now Prayagraj)
 - 3. Calcutta (Now Kolkata)
 - 4. Madras (Now Chennai)

Question ID : 6549783406
Status : Answered
Chosen Option : 1

Q.3 The Gandhara School of Art was influenced by _____ art.

- Ans
- 1. Korean and Mongolian
 - 2. Persian and Turkish
 - 3. Greek and Roman
 - 4. Chinese and Japanese

Question ID : 6549783401
Status : Answered
Chosen Option : 4

Q.4 Taxonomic studies consider a group of individual organisms with fundamental similarities as a/an _____.

- Ans
- 1. order
 - 2. species
 - 3. family
 - 4. class

Question ID : 6549783388
Status : Answered
Chosen Option : 2

Q.5 As on June 2020, in which of the following places of India are coins minted by the Government of India?

- Ans
- 1. Alipore
 - 2. Cuttack
 - 3. Indore
 - 4. Gurugram

Question ID : 6549783374
Status : Answered
Chosen Option : 1

Q.6 As of 2020, which of the following is a non-BJP ruled state?

- Ans
- 1. Uttarakhand
 - 2. Andhra Pradesh
 - 3. Madhya Pradesh
 - 4. Karnataka

Question ID : 6549783385
Status : Answered
Chosen Option : 2

Q.7 With reference to human physiology, which of the following lobes is mainly concerned with visual information?

- Ans
- 1. Occipital
 - 2. Temporal
 - 3. Parietal
 - 4. Frontal

Question ID : 6549783391
Status : Not Answered
Chosen Option : --

Q.8 Which of the following pairs is INCORRECTLY matched?

- Ans 1. Mirza Mohammad Qasim : Shahjahan Nama
 2. Abul Fazl : Akbarnama
 3. Gulbadan Begum : Humayun Nama
 4. Abdul Hamid Lahori : Padshahnama

Question ID : 6549783403
Status : Answered
Chosen Option : 1

Q.9 Which of the following pairs is INCORRECT?

- Ans 1. Tamaasha – Uttarakhand
 2. Maach – Madhya Pradesh
 3. Mudiyettu – Kerala
 4. Bhavai – Gujarat

Question ID : 6549783361
Status : Answered
Chosen Option : 1

Q.10 In the context of tennis, what is the nationality of Steffi Graf?

- Ans 1. Canada
 2. Australia
 3. Germany
 4. USA

Question ID : 6549783366
Status : Marked For Review
Chosen Option : 3

Q.11 As of August 2020, how many classical dance forms exist in India?

- Ans 1. 12
 2. 10
 3. 6
 4. 8

Question ID : 6549783359
Status : Answered
Chosen Option : 4

Q.12 In which year did PV Sindhu for the first time break into the top 20 of Badminton World Federation Ranking for women?

- Ans
- 1. 2013
 - 2. 2010
 - 3. 2012
 - 4. 2011

Question ID : 6549783364
Status : Answered
Chosen Option : 1

Q.13 Part XVII of the Constitution of India deals with the official language in Articles 343 to

- Ans
- 1. 352
 - 2. 349
 - 3. 351
 - 4. 356

Question ID : 6549783383
Status : Answered
Chosen Option : 3

Q.14 Which of the following statements is correct with regard to Consumer Price Index?

- Ans
- 1. It measures the average change in the sale price of goods and services either as they leave the place of production or as they enter the place of production.
 - 2. It is used to monitor changes in the cost of living over time.
 - 3. It is used to monitor the cost of the goods and services bought by producers and firms.
 - 4. It reflects the price of all the goods and services produced domestically.

Question ID : 6549783380
Status : Answered
Chosen Option : 2

Q.15 Which of the following Land Revenue Systems was introduced by Thomas Munro in 1820?

- Ans
- 1. Zamindari
 - 2. Mahalwari
 - 3. Ryotwari
 - 4. Zabti

Question ID : 6549783404
Status : Answered
Chosen Option : 3

Q.16 Which of the following is a clause on the Indian bank notes?

- Ans
- 1. I promise to extend
 - 2. I promise to talk
 - 3. I am the money of India
 - 4. I promise to pay

Question ID : 6549783375
Status : Answered
Chosen Option : 4

Q.17 In 1932, the British Prime Minister _____ announced the Communal Award which provided for separate electorates for the 'Depressed Classes', the Muslims, the Europeans, the Sikhs, the Anglo-Indians and the Indian-based Christians.

- Ans
- 1. Bonar Law
 - 2. Ramsay MacDonald
 - 3. Stanley Baldwin
 - 4. Clement Attlee

Question ID : 6549783405
Status : Answered
Chosen Option : 2

Q.18 In India, the Attorney General is appointed by the _____.

- Ans
- 1. Prime Minister
 - 2. Finance Minister
 - 3. Chief Justice of India
 - 4. President

Question ID : 6549783382
Status : Answered
Chosen Option : 4

Q.19 Who among the following is the winner of the Nobel Prize in Literature 2019?

- Ans
- 1. Peter Handke
 - 2. Kazuo Ishiguro
 - 3. Alice Munro
 - 4. Bob Dylan

Question ID : 6549783367
Status : Marked For Review
Chosen Option : 2

Q.20 The Cellular Jail, which is famous for its unique architecture, is located in _____.

- Ans
- 1. Daman
 - 2. Port Blair
 - 3. Puducherry
 - 4. Kavaratti

Question ID : 6549783362
Status : Answered
Chosen Option : 2

Q.21 The Nagarhole National Park is located in _____.

- Ans
- 1. Arunachal Pradesh
 - 2. Karnataka
 - 3. Tamil Nadu
 - 4. Goa

Question ID : 6549783394
Status : Answered
Chosen Option : 2

Q.22 With reference to the United Nations' Sustainable Development Goals, which of the following pairs is correct?

- Ans
- 1. Life Below Water - Goal 15
 - 2. Climate Action - Goal 13
 - 3. Clean Water and Sanitation - Goal 5
 - 4. Affordable and Clean Energy - Goal 11

Question ID : 6549783392
Status : Not Answered
Chosen Option : --

Q.23 Which of the following was NOT commissioned by Emperor Shah Jahan?

- Ans
- 1. Shahajahanabad, Delhi
 - 2. Red Fort, Delhi
 - 3. Jama Masjid, Delhi
 - 4. Humayun's Tomb, Delhi

Question ID : 6549783357
Status : Answered
Chosen Option : 4

Q.24 Who was the 'Man of the Match' at the 1983 Men's World Cup Cricket Final?

- Ans
- 1. K Srikanth
 - 2. Madan Lal
 - 3. Kapil Dev
 - 4. Mohinder Amarnath

Question ID : 6549783365
Status : Marked For Review
Chosen Option : 4

Q.25 Netaji Subhas National Institute of Sports is located in _____.

- Ans
- 1. Jhansi
 - 2. Patiala
 - 3. Imphal
 - 4. Guwahati

Question ID : 6549783363
Status : Answered
Chosen Option : 2

Q.26 How many atoms are there in a methane molecule?

- Ans
- 1. 3
 - 2. 5
 - 3. 4
 - 4. 2

Question ID : 6549783387
Status : Answered
Chosen Option : 2

Q.27 अगस्त 2020 तक की स्थिति के अनुसार, राष्ट्रीय पेंशन योजना के लिए किए गए योगदान _____ तक अतिरिक्त कर कटौती के पात्र हैं।

- Ans
- 1. ₹62,000
 - 2. ₹40,000
 - 3. ₹65,000
 - 4. ₹50,000

Question ID : 6549783378
Status : Answered
Chosen Option : 2

Q.28 The terms Veld, Downs, Pampas are related with _____.

- Ans
- 1. types of clouds
 - 2. grasslands
 - 3. commercial agriculture
 - 4. canyons

Question ID : 6549783396
Status : Answered
Chosen Option : 2

Q.29 Which of the following pairs is INCORRECT?

- Ans
- 1. Gulf - A large inlet from the ocean into the landmass
 - 2. Isthmus - A narrow piece of land connecting two larger areas
 - 3. Archipelago - A chain of islands
 - 4. Barchan - A strip of land sloping gently towards the sea

Question ID : 6549783395
Status : Answered
Chosen Option : 2

Q.30 Who among the following kings was given the title of 'Andhra Bhoja'?

- Ans
- 1. Aliya Rama Raya
 - 2. Vira Narasimha Raya
 - 3. Krishnadeva Raya
 - 4. Rama Raya

Question ID : 6549783402
Status : Answered
Chosen Option : 3

Q.31 Who among the following is the author of the book 'You Can Win'?

- Ans
- 1. Rohini Mundra
 - 2. Shiv Khera
 - 3. Sandeep Maheshwari
 - 4. Dipa Karmakar

Question ID : 6549783372
Status : Not Answered
Chosen Option : --

Q.32 In which year did the Government of India launch the Antyodaya Anna Yojana?

- Ans
- 1. 1995
 - 2. 2000
 - 3. 2005
 - 4. 1998

Question ID : 6549783376
Status : Not Answered
Chosen Option : --

Q.33 Which of the following ports is situated in the State of Gujarat?

- Ans
- 1. Panambur
 - 2. Haldia
 - 3. Paradip
 - 4. Hazira

Question ID : 6549783393
Status : Answered
Chosen Option : 2

Q.34 Who among the following is the creator of the character 'Sherlock Holmes'?

- Ans
- 1. Walt Disney
 - 2. Alice Munro
 - 3. Federico Pedrocchi
 - 4. Arthur Conan Doyle

Question ID : 6549783368
Status : Not Answered
Chosen Option : --

Q.35 The famous anthology of poems 'Madhushala' is written by _____.

- Ans
- 1. Kusumagraj
 - 2. Kannadasan
 - 3. Harivansh Rai Bachchan
 - 4. Mahasweta Devi

Question ID : 6549783369
Status : Answered
Chosen Option : 3

Q.36 With reference to the Union Budget 2020 - 2021, which of the following is NOT a component of Aspirational India?

- Ans
- 1. Agriculture, irrigation and rural development
 - 2. Good diplomatic relationship with neighbouring countries
 - 3. Wellness, water and sanitation
 - 4. Education and skills

Question ID : 6549783377
Status : Answered
Chosen Option : 2

Q.37 In the context of the Banking Sector in India, which of the following statements is INCORRECT?

- Ans
- 1. The Indian law legalises the use of Rupee as a medium of exchange.
 - 2. Livestock may also be a form of collateral.
 - 3. Credit always pushes the borrower into a situation from which recovery is very painful.
 - 4. The RBI issues currency on behalf of the Central Government.

Question ID : 6549783373
Status : Marked For Review
Chosen Option : 2

Q.38 Morphine can be extracted from:

- Ans
- 1. tobacco
 - 2. alcohol
 - 3. cannabis
 - 4. opium

Question ID : 6549783390
Status : Answered
Chosen Option : 4

Q.39 हवा में जलाए जाने पर मैग्नीशियम की पट्टी चमकदार _____ ज्वाला के साथ जलती है।

- Ans
- 1. हरी
 - 2. सफ़ेद
 - 3. लाल
 - 4. नीली

Question ID : 6549783389
Status : Not Answered
Chosen Option : --

Q.40 स्वतंत्र भारत के प्रथम मंत्रिमंडल के संदर्भ में, निम्नलिखित में से कौन सा युग्म सुमेलित है?

- Ans
- 1. राजकुमारी अमृत कौर - शिक्षा
 - 2. मौलाना अबुल कमाल आज़ाद - वित्त
 - 3. श्यामा प्रसाद मुखर्जी - उद्योग एवं आपूर्ति
 - 4. राजेंद्र प्रसाद - वाणिज्य

Question ID : 6549783386
Status : **Marked For Review**
Chosen Option : 3

Q.41 As of August 2020, who amongst the following is the Chief Minister of Nagaland?

- Ans
- 1. Prem Singh Tamang
 - 2. Biplab Kumar Dev
 - 3. Zoramthanga
 - 4. Neiphiu Rio

Question ID : 6549783384
Status : **Answered**
Chosen Option : 4

Q.42 The 'Mariana Trench' is in the _____.

- Ans
- 1. North Atlantic Ocean
 - 2. South Atlantic Ocean
 - 3. Pacific Ocean
 - 4. Indian Ocean

Question ID : 6549783398
Status : **Answered**
Chosen Option : 3

Q.43 River Banas is a tributary of the _____ river.

- Ans
- 1. Indus
 - 2. Chambal
 - 3. Brahmaputra
 - 4. Damodar

Question ID : 6549783397
Status : **Answered**
Chosen Option : 2

Q.44 औरंगज़ेब द्वारा अपने निम्नलिखित में से किन दो सर्वोच्च पदधारक सामंतों को 'मिर्ज़ा राजा' का खिताब दिया गया था?

- Ans
- 1. रतन सिंह और उदय सिंह द्वितीय
 - 2. जय सिंह और जसवंत सिंह
 - 3. मान सिंह तोमर और राणा कुंभा
 - 4. गोविंद चौहान और राणा हम्मीर

Question ID : 6549783399
Status : Not Answered
Chosen Option : --

Q.45 Which of the following is a Statutory Body?

- Ans
- 1. CAG
 - 2. Finance Commission
 - 3. UPSC
 - 4. NHRC

Question ID : 6549783381
Status : Answered
Chosen Option : 4

Q.46 In August 2020, _____ was appointed as the Governor of Meghalaya.

- Ans
- 1. Vajubhai Vala
 - 2. Kalraj Mishra
 - 3. Satya Pal Malik
 - 4. Ramesh Vyas

Question ID : 6549783370
Status : Answered
Chosen Option : 3

Q.47 In July 2020, who among the following launched the 'Pravasi Rojgar App' to help workers in finding jobs?

- Ans
- 1. Prakash Jha
 - 2. Anurag Kashyap
 - 3. Sonu Sood
 - 4. Ranbir Kapoor

Question ID : 6549783371
Status : Answered
Chosen Option : 3

Q.48 The term 'Tripitakas' in Buddhism mean three:

- Ans 1. baskets
 2. houses
 3. roads
 4. trees

Question ID : 6549783400
Status : Answered
Chosen Option : 1

Q.49 Which of the following musicians belonged to the state of Assam?

- Ans 1. Anuradha Paudwal
 2. Bhupen Hazarika
 3. Hariharan
 4. Manna Dey

Question ID : 6549783360
Status : Answered
Chosen Option : 2

Q.50 The Shore Temple, which is a UNESCO Heritage Site, is located in the state of _____.

- Ans 1. Tamil Nadu
 2. Karnataka
 3. Maharashtra
 4. Madhya Pradesh

Question ID : 6549783358
Status : Answered
Chosen Option : 1

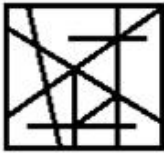
Section : Part B- Reasoning

Q.1 Select the option figure in which the given figure is embedded (rotation is NOT allowed).

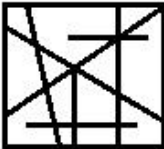


Ans

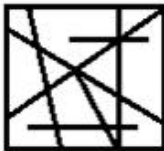
✓ 1.



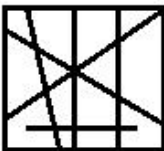
✗ 2.



✗ 3.



✗ 4.



Question ID : 6549783426

Status : Answered

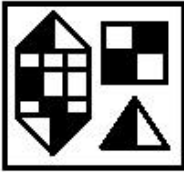
Chosen Option : 1

Q.2 Select the correct mirror image of the given figure when a vertical mirror is placed to the right of the figure.




Ans


✗ 1.




✓ 2.



✗ 3.



✗ 4.

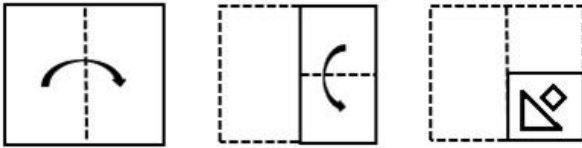


Question ID : 6549783424

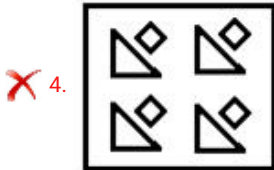
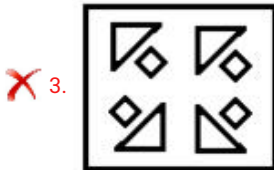
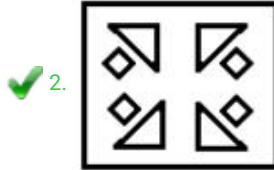
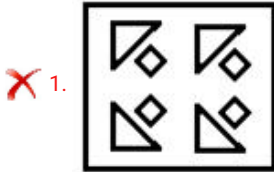
Status : Answered

Chosen Option : 2

Q.3 A paper is folded and cut as shown below. How will it appear when unfolded?

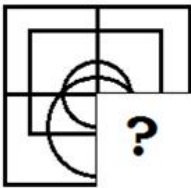


Ans



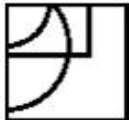
Question ID : 6549783425
Status : Answered
Chosen Option : 2

Q.4 Which option figure will replace the question mark (?) to complete the given pattern?



Ans

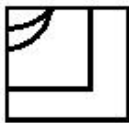
✓ 1.



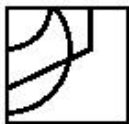
✗ 2.



✗ 3.



✗ 4.



Question ID : 6549783422

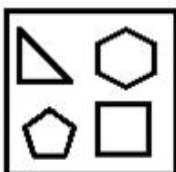
Status : Answered

Chosen Option : 1

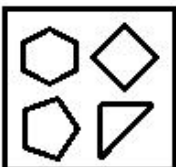
Q.5 Three of the following four figures are alike in a certain way and one is different. Select the odd one.

Ans

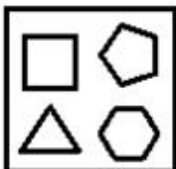
1.



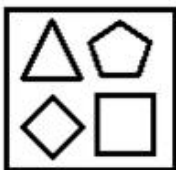
2.



3.



4.

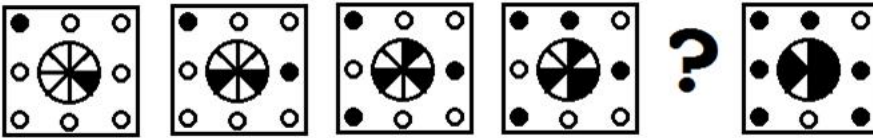


Question ID : 6549783416

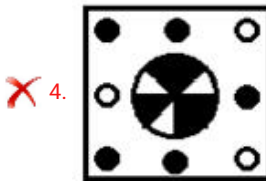
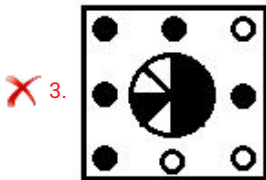
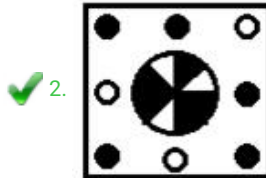
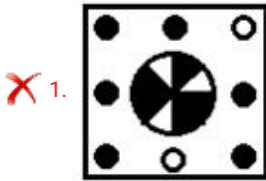
Status : Answered

Chosen Option : 2

Q.6 Which option figure will replace the question mark (?) in the following series?



Ans



Question ID : 6549783420
 Status : Answered
 Chosen Option : 2

Q.7 Three different positions of the same non-standard dice are shown. Which number will be on the face opposite to the face with the number '6'?



Ans

✓ 1. 5

✗ 2. 2

✗ 3. 3

✗ 4. 1

Question ID : 6549783428
 Status : Answered
 Chosen Option : 2

Q.8 Select the set in which the numbers are related in the same way as are the numbers of the following set.

(3, 7, 58)

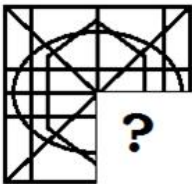
- Ans**
- 1. (7, 5, 39)
 - 2. (3, 2, 13)
 - 3. (6, 4, 53)
 - 4. (8, 7, 112)

Question ID : 6549783413

Status : Answered

Chosen Option : 2

Q.9 Which option figure will replace the question mark (?) to complete the given pattern?



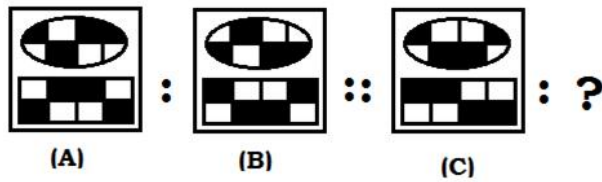
- Ans**
- 1.
 - 2.
 - 3.
 - 4.

Question ID : 6549783423

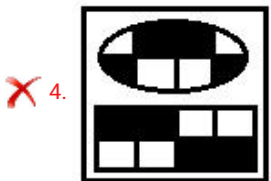
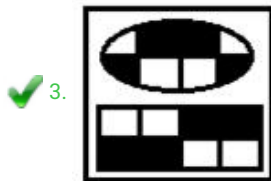
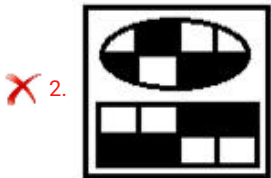
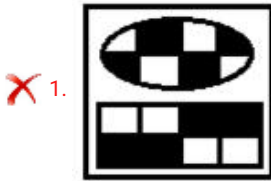
Status : Answered

Chosen Option : 2

Q.10 Select the option that is related to figure C in the same way as figure B is related to figure A.



Ans



Question ID : 6549783418
 Status : Answered
 Chosen Option : 3

Q.11 Which number will replace the question mark (?) in the following series?

7, 16, 28, 40, ?, 72, 88, 106, 126

- Ans
- ✗ 1. 60
 - ✗ 2. 56
 - ✗ 3. 52
 - ✓ 4. 54

Question ID : 6549783411
 Status : Answered
 Chosen Option : 3

Q.12 Which number will replace the question mark (?) in the following series?

11, 15, 23, ?, 71, 135, 263, 519

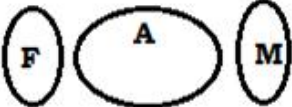



- Ans
- 1. 39
 - 2. 43
 - 3. 27
 - 4. 57

Question ID : 6549783410
Status : Answered
Chosen Option : 1

Q.13 Select the Venn diagram that best illustrates the relationship between the following classes.

Amphibian, Monkey, Frog

Ans

- 1. 
- 2. 
- 3. 
- 4. 

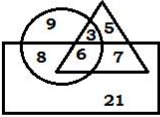
Question ID : 6549783430
Status : Answered
Chosen Option : 2

Q.14 Three of the following four words are alike in a certain way and one is different. Select the odd one.

- Ans
- 1. Disseminate
 - 2. Congregate
 - 3. Disperse
 - 4. Scatter

Question ID : 6549783408
Status : Answered
Chosen Option : 2

Q.15 In the Venn diagram given below, the 'rectangle' represents 'Male Cricketers', the 'triangle' represents 'Indian', and the 'circle' represents 'Engineers'. The numbers given in the diagram represent number of persons of that particular category.



What is the count of Indian Male Cricketers who are NOT Engineers?

- Ans**
- 1. 6
 - 2. 7
 - 3. 8
 - 4. 13

Question ID : 6549783431
 Status : Answered
 Chosen Option : 2

Q.16 Select the option that is related to the third number in the same way as the second number is related to the first number.

4751 : 8998 :: 5236 : ?

- Ans**
- 1. 9999
 - 2. 8998
 - 3. 8888
 - 4. 9879

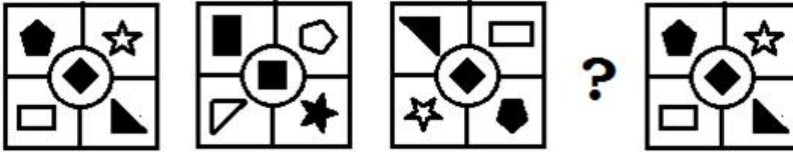
Question ID : 6549783412
 Status : Answered
 Chosen Option : 3

Q.17 'Ammeter' is related to 'Current' in the same way as 'Anemometer' is related to '_____'.

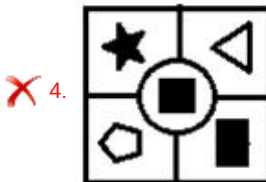
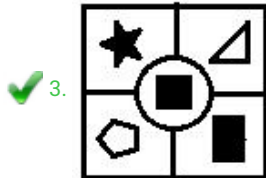
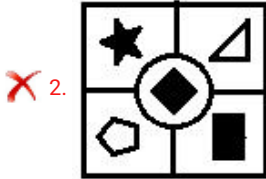
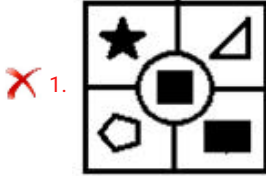
- Ans**
- 1. Wind Speed
 - 2. Voltage
 - 3. Light
 - 4. Blood Pressure

Question ID : 6549783407
 Status : Answered
 Chosen Option : 1

Q.18 Which option figure will replace the question mark (?) in the following series?



Ans



Question ID : 6549783421

Status : Answered

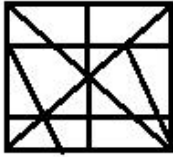
Chosen Option : 4

Q.19 Select the option figure in which the given figure is embedded (rotation is NOT allowed).

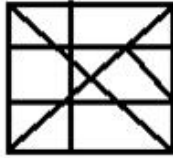


Ans

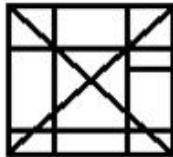
1.



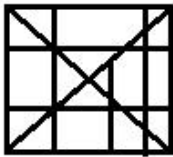
2.



3.



4.



Question ID : 6549783427

Status : Answered

Chosen Option : 4

Q.20 Which two signs should be interchanged to make the given equation correct?

$$570 \times 8 - 240 + 75 \div 15 = 79$$

Ans

1. \div and $-$

2. $+$ and $-$

3. $+$ and \times

4. \times and \div

Question ID : 6549783414


Status : Answered

Chosen Option : 1


Q.21 Three of the following four figures are alike in a certain way and one is different. Select the odd one.

Ans


1.




2.



3.



4.



Question ID : 6549783417

Status : Answered

Chosen Option : 2

Q.22 In a code language, MARKET is written as GVPIZN. How will RETAIL be written in that language?

Ans

1. ORZGUI

2. ORZGVI

3. ORBGVI

4. ORBGUI

Question ID : 6549783409

Status : Answered

Chosen Option : 1

Q.23 A retailer sells 2 products A and B to a customer. On product A he makes a profit of 20% on his cost price of ₹80, while on product B he incurs a loss of 20% on his cost price as he sold it at ₹80. Overall, what is the amount of profit or loss that he makes on these two products?

Ans

1. Loss of ₹16

2. Loss of ₹4

3. No profit or no loss

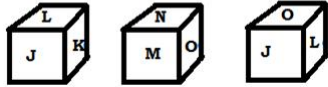
4. Profit of ₹16

Question ID : 6549783415

Status : Answered

Chosen Option : 3

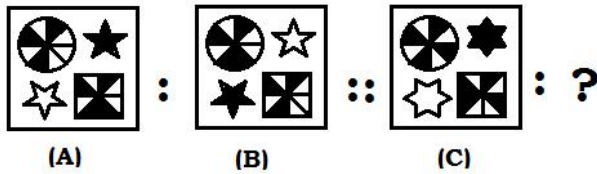
Q.24 Three different positions of the same non-standard dice are shown. Which letter will be on the face opposite to the face with the letter 'M'?



- Ans
- 1. O
 - 2. K
 - 3. L
 - 4. J

Question ID : 6549783429
 Status : Answered
 Chosen Option : 4

Q.25 Select the option that is related to figure C in the same way as figure B is related to figure A.



- Ans
- 1.
 - 2.
 - 3.
 - 4.

Question ID : 6549783419
 Status : Answered
 Chosen Option : 2

Q.1 A person loses 20%, when he sells a watch for ₹2,300. What is his profit percentage if he sells it for ₹3,231.50?

- Ans**
- 1. 10.8
 - 2. 15.2
 - 3. 12.8
 - 4. 12.4

Question ID : 6549783439
Status : Answered
Chosen Option : 4

Q.2 The perimeter of a circular field is 1012 m. The area of this field is equal to a rectangular garden whose sides are in the ratio 14 : 11. The longer side of the garden is: (Take $\pi = \frac{22}{7}$)

- Ans**
- 1. 294 m
 - 2. 322 m
 - 3. 308 m
 - 4. 336 m

Question ID : 6549783445
Status : Not Answered
Chosen Option : --

Q.3 An article is sold by giving a discount of 30% on its marked price. If there is a gain of 20%, and the cost price of the article is ₹840, then the marked price of the article is:

- Ans**
- 1. ₹1,440
 - 2. ₹1,240
 - 3. ₹1,260
 - 4. ₹1,460

Question ID : 6549783438
Status : Answered
Chosen Option : 1

Q.4 Train A travelling at 55 km/h takes 21 seconds to cross completely train B travelling at 53 km/h in the opposite direction. The length of train A is 2.5 times the length of train B. Train A passes a bridge in 72 seconds. What is the length (in m) of the bridge?

- Ans**
- 1. 650
 - 2. 600
 - 3. 550
 - 4. 575

Question ID : 6549783444
Status : Answered
Chosen Option : 2

Q.5 सविता अपनी मासिक आय का 8% एक धर्मार्थ न्यास को दान करने का निर्णय लेती है। दान के दिन वह अपने निर्णय को बदलते हुए ₹2,880 की धन-राशि दान करती है जो दान के लिए पहले से निर्धारित धन-राशि से 20% कम है। उसकी मासिक आय (₹ में) कितनी है?

- Ans
- 1. ₹36,000
 - 2. ₹48,000
 - 3. ₹45,000
 - 4. ₹40,000

Question ID : 6549783437
Status : Answered
Chosen Option : 3

Q.6 Let x be the least number between 1400 and 1800, which when divided by 5, 6, 8, 9 and 12, the remainder in each case is 3. When x is divided by 11, the remainder is:

- Ans
- 1. 2
 - 2. 1
 - 3. 5
 - 4. 3

Question ID : 6549783432
Status : Not Answered
Chosen Option : --

Q.7 The value of $\frac{7}{8} \div 4\frac{2}{3}$ of $1\frac{1}{4} - 1\frac{1}{4} \times 1\frac{1}{5} + (0.\overline{53} \div 0.\overline{58}) \times 2\frac{3}{4}$ is:

- Ans
- 1. $\frac{17}{20}$
 - 2. $\frac{27}{8}$
 - 3. $\frac{23}{20}$
 - 4. $\frac{7}{5}$

Question ID : 6549783435
Status : Not Answered
Chosen Option : --

Q.8 Pipes A and B can fill a tank in 10 hours and $13\frac{1}{3}$ hours, respectively. Pipe C is an emptying pipe. When all three pipes are opened together, the tank is filled in 8 hours. Pipe C alone can empty 60% part of the tank in:

- Ans
- 1. 12 hours
 - 2. 15 hours
 - 3. 9 hours
 - 4. 10 hours

Question ID : 6549783443
Status : Answered
Chosen Option : 1

Q.9 A sum of ₹8,000 amounts to ₹13,824 in 3 years at R% p.a., interest compounded annually. What will it amount to in $1\frac{1}{4}$ years at the same rate, if the interest is compounded half-yearly?

- Ans
- 1. ₹10,648
 - 2. ₹10,148
 - 3. ₹10,164
 - 4. ₹10,872

Question ID : 6549783442
Status : Answered
Chosen Option : 2

Q.10 एक विभाजन क्रिया में, भाजक भागफल से 8 गुना और शेषफल से 9 गुना है। यदि शेषफल 24 है, तो भाज्य क्या होगा?

- Ans
- 1. 5,858
 - 2. 5,820
 - 3. 5,856
 - 4. 5,824

Question ID : 6549783433
Status : Not Answered
Chosen Option : --

Q.11 A certain sum amounts to ₹5,808 after 2 years and to ₹7,320 after 5 years at the same rate per cent per annum at simple interest. What will be the simple interest on a sum of ₹8,500 for $4\frac{2}{3}$ years at the same rate?

- Ans
- 1. ₹4,352
 - 2. ₹4,165
 - 3. ₹5,440
 - 4. ₹4,760

Question ID : 6549783441
Status : Not Answered
Chosen Option : --

Q.12 A sum of ₹ x is divided between A, B and C such that the ratio of the shares of A and B is 3 : 5, and that of B and C is 4 : 7. If the difference between the shares of A and C is ₹2,001, then the value of x is:

- Ans
- 1. 5,481
 - 2. 5,742
 - 3. 5,655
 - 4. 5,829

Question ID : 6549783440
Status : Answered
Chosen Option : 4

Q.13 The curved surface area of a right circular cylinder is 3432 cm^2 and the radius of its base is 26 cm. Its volume (in cm^3)

is: (Take $\pi = \frac{22}{7}$)

- Ans
- 1. 29744
 - 2. 22308
 - 3. 59488
 - 4. 44616

Question ID : 6549783446
Status : Answered
Chosen Option : 4

Q.14 The average weight of a certain number of persons in a group is 78 kg. If 4 persons having average weight 80.75 kg leave the group, the average weight of the remaining persons becomes 77.725 kg. The number of persons, initially, is:

- Ans
- 1. 36
 - 2. 44
 - 3. 46
 - 4. 34

Question ID : 6549783434
Status : Not Answered
Chosen Option : --

Q.15 The income of x is 80% more than that of y, and the income of z is 60% of the total income of x and y. The income of z is what percentage less than that of x (correct to one decimal place)?

- Ans
- 1. 6.3%
 - 2. 7.1%
 - 3. 7.3%
 - 4. 6.7%

Question ID : 6549783436
Status : Answered
Chosen Option : 4

Section : Part D- Computer Proficiency

Q.1 Which of the following keyboard shortcuts opens the FIND and REPLACE (or REPLACE) dialogue box in MS Word?

- Ans
- 1. CTRL + R
 - 2. CTRL + H
 - 3. ALT + H
 - 4. ALT + R

Question ID : 6549783452
Status : Answered
Chosen Option : 2

Q.2 When you enter a value in an MS Excel cell and press SHIFT + ENTER keys, what will happen?

- Ans
- 1. The cursor (selection box) will move to the upper cell
 - 2. The cursor (selection box) will move to the lower cell
 - 3. The cursor (selection box) will move to the right cell
 - 4. The cursor (selection box) will move to the left cell

Question ID : 6549783448
Status : Answered
Chosen Option : 3

Q.3 Which of the following statements is/are FALSE?

- (i) In MS Word, a table can have one cell.
(ii) In MS Word, the font size of a text cannot be less than 8.

- Ans
- 1. Neither i nor ii
 - 2. Both i and ii
 - 3. Only i
 - 4. Only ii

Question ID : 6549783453
Status : Not Answered
Chosen Option : --

Q.4 All the Excel functions are stored in _____ under the Formulas tab.

- Ans
- 1. AutoSum
 - 2. Styles
 - 3. Formula bar
 - 4. Function Library

Question ID : 6549783454
Status : Answered
Chosen Option : 4

Q.5 The _____ provides high-speed internet access.

- Ans
- 1. dial-up
 - 2. TCP
 - 3. ISP
 - 4. broadband

Question ID : 6549783455
Status : Answered
Chosen Option : 4

Q.6 What will be the result of the following MS Excel formula?

=SUM(8/4/2, 1-2/2)

- Ans
- 1. 3.5
 - 2. 1
 - 3. 4
 - 4. 0.5

Question ID : **6549783449**
Status : **Answered**
Chosen Option : **2**

Q.7 With respect to the internet, what is the full-form of FTP?

- Ans
- 1. Fast Transmission Protocol
 - 2. First Telecommunication Protocol
 - 3. Fast Telecommunication Protocol
 - 4. File Transfer Protocol

Question ID : **6549783456**
Status : **Answered**
Chosen Option : **4**

Q.8 What is the minimum number of columns that a table in MS Word can have?

- Ans
- 1. 8
 - 2. 0
 - 3. 1
 - 4. 2

Question ID : **6549783450**
Status : **Answered**
Chosen Option : **1**

Q.9 Which of the following components of an MS Excel worksheet displays the contents of the selected cell?

- Ans
- 1. Status bar
 - 2. Title bar
 - 3. Formula bar
 - 4. Name box

Question ID : **6549783447**
Status : **Answered**
Chosen Option : **2**

Q.10 Which of the following stores the cut or copied texts in MS Word?

Ans

 1. Table

 2. Footer

 3. Clipboard

 4. Header

Question ID : **6549783451**

Status : **Answered**

Chosen Option : **3**