

# Delhi Police [Constable]

## Previous Year Paper

Section : Part A- General Knowledge or Current Affairs

Q.1 As per the Union Budget 2020-21, TDS at the rate of \_\_\_\_ is levied on e-commerce transactions.

- Ans
- 1. 3%
  - 2. 1%
  - 3. 2.5%
  - 4. 0.25%

Question ID : 4244292149  
Status : Not Answered  
Chosen Option : --

Q.2 'Akela' is a fictional character in the children's story book \_\_\_\_.

- Ans
- 1. The Jungle Book
  - 2. The Adventures of Tom Sawyer
  - 3. The Adventures of Huckleberry Finn
  - 4. Alice's Adventures in Wonderland

Question ID : 4244292144  
Status : Answered  
Chosen Option : 1

Q.3 In which of the following years was the Family Courts Act enacted?

- Ans
- 1. 1948
  - 2. 1984
  - 3. 1964
  - 4. 2004

Question ID : 4244292155  
Status : Answered  
Chosen Option : 4

Q.4 The \_\_\_\_\_ in Punjab is held to commemorate the warriors who laid down their lives in the battle between Guru Gobind Singh and the Mughals.

- Ans
- 1. Rauza Sharif Urs
  - 2. Hola Mohalla
  - 3. Maghi Mela
  - 4. Jor Mela

Question ID : 4244292135  
Status : Answered  
Chosen Option : 2

Q.5 The Rohtas Fort is located in present day \_\_\_\_\_.

- Ans
- 1. Nepal
  - 2. Bangladesh
  - 3. Pakistan
  - 4. India

Question ID : 4244292133  
Status : Answered  
Chosen Option : 3

Q.6 By which Constitutional Amendment Act, the voting age of Indian citizens has been reduced from 21 years to 18 years?

- Ans
- 1. Constitution (Sixty-first Amendment) Act, 1988
  - 2. Constitution (Sixty-second Amendment) Act, 1989
  - 3. Constitution (Sixty-fourth Amendment) Act, 1990
  - 4. Constitution (Sixty-third Amendment) Act, 1988

Question ID : 4244292157  
Status : Answered  
Chosen Option : 1

Q.7 The Census of India 2011 was the \_\_\_\_\_ national census after Independence.

- Ans
- 1. seventh
  - 2. ninth
  - 3. eleventh
  - 4. fifteenth

Question ID : 4244292169  
Status : Answered  
Chosen Option : 1

**Q.8 Who was the head coach of the Mumbai Indians IPL cricket team in 2019?**

- Ans
- 1. Shane Bond
  - 2. James Pamment
  - 3. Robin Singh
  - 4. Mahela Jayawardene

Question ID : 4244292136  
Status : Answered  
Chosen Option : 4

**Q.9 Which of the following statements is INCORRECT?**

- Ans
- 1. Proteins help build and repair tissues in the human body.
  - 2. Extra fat in the human body is stored under the skin.
  - 3. Deficiency of iodine in the human body causes anaemia.
  - 4. The human body needs minerals in small quantities.

Question ID : 4244292162  
Status : Answered  
Chosen Option : 3

**Q.10 A football stadium named after Bhaichung Bhutia has been built near his birthplace in**

- Ans
- 1. Manipur
  - 2. Sikkim
  - 3. Nagaland
  - 4. Meghalaya

Question ID : 4244292137  
Status : Answered  
Chosen Option : 2

**Q.11 Which of the following organisations/agencies does NOT operate a 'Payment Bank' in India as of August 2020?**

- Ans
- 1. Fino
  - 2. Wipro
  - 3. India Post
  - 4. Jio

Question ID : 4244292147  
Status : Answered  
Chosen Option : 2

Q.12 Which of the following is the mausoleum of Bahaduddinbhai Hasainbhai in Junagadh?

- Ans
- 1. Chini Ka Rauza
  - 2. Chausath Khamba
  - 3. Gol Gumbaz
  - 4. Mahabat Maqbara

Question ID : 4244292132  
Status : Answered  
Chosen Option : 2

Q.13 The Adichanallur archaeological site is located in the state of \_\_\_\_\_.

- Ans
- 1. Karnataka
  - 2. Tamil Nadu
  - 3. Andhra Pradesh
  - 4. Kerala

Question ID : 4244292174  
Status : Answered  
Chosen Option : 3

Q.14 The \_\_\_\_\_ was/were founded by Sir William Jones in 1784.

- Ans
- 1. Calcutta Madrasas
  - 2. Sanskrit College at Banaras
  - 3. Asiatic Society of Bengal
  - 4. Fort William College

Question ID : 4244292177  
Status : Answered  
Chosen Option : 4

Q.15 Which of the following statements about clayey soil is INCORRECT?

- Ans
- 1. Clayey soil is used to make pots and toys.
  - 2. Clayey soil cannot hold water for long periods.
  - 3. There is very little empty space between particles of clayey soil.
  - 4. Clayey soil is also called fuller's earth.

Question ID : 4244292170  
Status : Answered  
Chosen Option : 2

Q.16 \_\_\_\_\_ is a disease that generally develops in the lungs with symptoms such as fever, cough, chest pain and weight loss.

- Ans
- 1. Malaria
  - 2. Dengue
  - 3. Elephantiasis
  - 4. Tuberculosis

Question ID : 4244292161  
Status : Answered  
Chosen Option : 4

Q.17 Which of the following statements is true?

- Ans
- 1. Tsunamis are rare in the Indian Ocean as compared to the Pacific Ocean.
  - 2. Warm ocean currents carry water from polar or higher latitudes to tropical or lower latitudes.
  - 3. The Burma tectonic plate went under the India tectonic plate causing the tsunami in 2004.
  - 4. Tides are lowest on full moon and new moon days.

Question ID : 4244292171  
Status : Answered  
Chosen Option : 1

Q.18 Who among the following industrialists has served as an MP in the Rajya Sabha?

- Ans
- 1. Azim Premji
  - 2. Gopichand Hinduja
  - 3. Vijay Mallya
  - 4. Adi Godrej

Question ID : 4244292143  
Status : Answered  
Chosen Option : 2

Q.19 Gandhiji requested Indians to observe \_\_\_\_\_ as a day of non-violent opposition to the Rowlatt Act.

- Ans
- 1. 9 August 1920
  - 2. 19 March 1920
  - 3. 26 September 1919
  - 4. 6 April 1919

Question ID : 4244292179  
Status : Answered  
Chosen Option : 2

Q.20 Who among the following cricketers has NEVER received the Rajiv Gandhi Khel Ratna Award?

- Ans
- 1. Virat Kohli
  - 2. Sachin Tendulkar
  - 3. Shikhar Dhawan
  - 4. MS Dhoni

Question ID : 4244292138  
Status : Answered  
Chosen Option : 3

Q.21 Which of the following is a form of music usually associated with Sufism?

- Ans
- 1. Qawwali
  - 2. Thumri
  - 3. Khayal
  - 4. Ghazal

Question ID : 4244292130  
Status : Answered  
Chosen Option : 1

Q.22 Which of the following does NOT form part of the fiscal policy of a country?

- Ans
- 1. Investment or disinvestment strategies
  - 2. Tax policy
  - 3. Supply of money in the economy
  - 4. Debt or surplus management

Question ID : 4244292150  
Status : Answered  
Chosen Option : 4

Q.23 Section 43 of the Motor Vehicles Act, 1988 allows for temporary registration of a vehicle for a period NOT exceeding \_\_\_\_\_.

- Ans
- 1. 6 months
  - 2. 12 months
  - 3. 1 month
  - 4. 2 months

Question ID : 4244292156  
Status : Answered  
Chosen Option : 1

Q.24 Which of the following was NOT an intermediary appointed by the British to collect land revenue from the people of India?

- Ans
- 1. Zamindar
  - 2. Mahalwari
  - 3. Ryotwari
  - 4. Kumaramatya

Question ID : 4244292175  
Status : Answered  
Chosen Option : 4

Q.25 Which of the following is an ancient Indian book on surgery?

- Ans
- 1. Susruta Samhita
  - 2. Arthashastra
  - 3. Manusmriti
  - 4. Charak Samhita

Question ID : 4244292142  
Status : Answered  
Chosen Option : 3

Q.26 In ancient India, the leader of merchant caravans was called \_\_\_\_\_.

- Ans
- 1. Maha-danda-nayaka
  - 2. Sandhi-vigrahika
  - 3. Prathama-kulika
  - 4. Sarthavaha

Question ID : 4244292178  
Status : Answered  
Chosen Option : 1

Q.27 Which Section of the Indian Penal Code deals with punishment for false evidence during judicial proceedings?

- Ans
- 1. 268
  - 2. 193
  - 3. 147
  - 4. 223

Question ID : 4244292158  
Status : Not Answered  
Chosen Option : --

Q.28 Who among the following governors of Goa was the first to take oath in Konkani language?

- Ans
- 1. Satya Pal Malik
  - 2. Bhagat Singh Koshyari
  - 3. Mridula Sinha
  - 4. Margaret Alva

Question ID : 4244292140  
Status : Answered  
Chosen Option : 2

Q.29 Which of the following was a slogan given by Swami Vivekananda?

- Ans
- 1. Give me blood and I will give you freedom
  - 2. Karo Ya Maro
  - 3. Inqilab Zindabad
  - 4. Arise, awake and stop not till the goal is reached

Question ID : 4244292176  
Status : Answered  
Chosen Option : 4

Q.30 The British reversed the partition of Bengal in \_\_\_\_\_.

- Ans
- 1. 1909
  - 2. 1913
  - 3. 1911
  - 4. 1905

Question ID : 4244292173  
Status : Answered  
Chosen Option : 3

Q.31 As per the Union Budget 2020-21, a Super Senior Citizen with net income up to ₹\_\_\_\_\_ is exempt from Income Tax.

- Ans
- 1. 7 lakhs
  - 2. 7.5 lakhs
  - 3. 5 lakhs
  - 4. 5.5 lakhs

Question ID : 4244292148  
Status : Answered  
Chosen Option : 2



Q.32 Bagurumba is a group dance performed by the \_\_\_\_\_ community.

- Ans
- 1. Majhi
  - 2. Bodo
  - 3. Rathawa
  - 4. Varli

Question ID : 4244292134  
Status : Not Answered  
Chosen Option : --

Q.33 As of September 2020, the rate of interest under the Emergency Credit Line Guarantee Scheme (ECLGS) announced by the Government of India is capped at \_\_\_\_\_ for banks and financial institutions.

- Ans
- 1. 6.75%
  - 2. 8.75%
  - 3. 7.25%
  - 4. 9.25%

Question ID : 4244292153  
Status : Answered  
Chosen Option : 3

Q.34 Which of the following statements is INCORRECT?

- Ans
- 1. Chlorofluorocarbons (CFCs) are responsible for decrease in atmospheric ozone.
  - 2. Ozone is a deadly poison.
  - 3. Ozone is a molecule formed by two atoms of oxygen.
  - 4. Ozone shields the surface of Earth from ultraviolet (UV) radiation from the Sun.

Question ID : 4244292160  
Status : Answered  
Chosen Option : 3

Q.35 Chopad (also known as Chaupar or Chausar) was an ancient Indian \_\_\_\_\_.

- Ans
- 1. warfare tactic
  - 2. board game
  - 3. adventure sport
  - 4. weapon

Question ID : 4244292172  
Status : Answered  
Chosen Option : 3

Q.36 \_\_\_\_\_ in India can be classified as rural or urban.

- Ans
- 1. Private commercial banks
  - 2. Public commercial banks
  - 3. Development banks
  - 4. Co-operative banks

Question ID : 4244292146  
Status : Answered  
Chosen Option : 4

Q.37 अंगूर की बेल \_\_\_\_\_ का एक उदाहरण है।

- Ans
- 1. झाड़ी (Shrub)
  - 2. जड़ी बूटी (Herb)
  - 3. विसर्पी (Creeper)
  - 4. आरोही (Climber)

Question ID : 4244292163  
Status : Answered  
Chosen Option : 1

Q.38 Which of the following committees of the Constituent Assembly was NOT chaired by Rajendra Prasad?

- Ans
- 1. Union Powers Committee
  - 2. Committee on the Rules of Procedure
  - 3. Ad hoc Committee on the National Flag
  - 4. Finance and Staff Committee

Question ID : 4244292159  
Status : Answered  
Chosen Option : 3

Q.39 Vini Mahajan was the first female chief secretary of the state of \_\_\_\_\_.

- Ans
- 1. Gujarat
  - 2. Tripura
  - 3. Kerala
  - 4. Punjab

Question ID : 4244292145  
Status : Answered  
Chosen Option : 2

Q.40 The \_\_\_\_\_ temple in Nepal is also known as the 'Monkey Temple'.

- Ans
- 1. Pashupatinath
  - 2. Buddasubba
  - 3. Swayambhunath
  - 4. Barashetra

Question ID : 4244292131  
Status : Not Answered  
Chosen Option : --

Q.41 With which of the following games/sports is R Praggnanandhaa associated?

- Ans
- 1. Chess
  - 2. Poker
  - 3. Table tennis
  - 4. Squash

Question ID : 4244292139  
Status : Answered  
Chosen Option : 1

Q.42 'Duns' are longitudinal valleys between the \_\_\_\_\_ and the Shiwaliks.

- Ans
- 1. Greater Himalayas
  - 2. Ganga-Brahmaputra Plains
  - 3. Lesser Himalayas
  - 4. Western Plains

Question ID : 4244292168  
Status : Answered  
Chosen Option : 3

Q.43 What was the most popular source of drinking water, as per the Census of India 2011, reported by more than 41% households?

- Ans
- 1. River
  - 2. Tap
  - 3. Well
  - 4. Hand pump / Tube well

Question ID : 4244292164  
Status : Answered  
Chosen Option : 1

Q.44 Which of the following cities lies on the banks of the river Brahmaputra?

- Ans
- 1. Cuttack
  - 2. Guwahati
  - 3. Patna
  - 4. Delhi

Question ID : 4244292167  
Status : Answered  
Chosen Option : 2

Q.45 Which of the following statements is true?

- Ans
- 1. The Himalayan Mountains lie to the south-east of India.
  - 2. Bay of Bengal lies to the north-west of India.
  - 3. Arabian Sea lies to the south-west of India.
  - 4. The Indian Ocean lies to the north-east of India.

Question ID : 4244292166  
Status : Answered  
Chosen Option : 3

Q.46 As per the Macro-Economic Framework Statement 2020-21, milk production in India grew \_\_\_\_\_ in 2018-19 over the previous year.

- Ans
- 1. 6.50%
  - 2. 0.50%
  - 3. 2.50%
  - 4. 10.50%

Question ID : 4244292152  
Status : Not Answered  
Chosen Option : --

Q.47 As of September 2020, which of the following is the most recent award given to film actress Kangana Ranaut?

- Ans
- 1. IIFA Award for Best Actress
  - 2. National Film Award for Best Actress
  - 3. Padma Shri
  - 4. CNN-IBN Indian of the Year Special Achievement

Question ID : 4244292141  
Status : Answered  
Chosen Option : 3

Q.48 Unregulated Deposit Schemes were banned in India by the 'Banning of Unregulated Deposit Schemes Act, \_\_\_\_\_'.

- Ans
- 1. 2016
  - 2. 2018
  - 3. 2019
  - 4. 2017

Question ID : 4244292154  
Status : Not Answered  
Chosen Option : --

Q.49 The *Ficus religiosa* is commonly known as the \_\_\_\_\_ tree in India.

- Ans
- 1. Babool
  - 2. Sal
  - 3. Peepal
  - 4. Neem

Question ID : 4244292165  
Status : Answered  
Chosen Option : 3

Q.50 The inaugural train under the 'Kisan Rail' scheme announced in the Union Budget 2020-21 ran between \_\_\_\_\_.

- Ans
- 1. Bihar and Telangana
  - 2. Maharashtra and Bihar
  - 3. Chhattisgarh and Karnataka
  - 4. Karnataka and Maharashtra

Question ID : 4244292151  
Status : Answered  
Chosen Option : 2

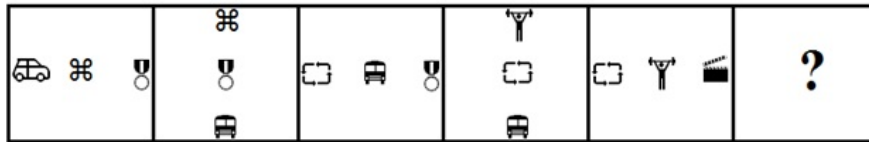
Section : Part B- Reasoning

Q.1 दिए गए चार शब्दों में से तीन में एक निश्चित प्रकार की समानता है और एक असंगत है। उस असंगत विकल्प का चयन करें।

- Ans
- 1. दौरा (Seizure)
  - 2. ऐंठन (Convulsion)
  - 3. प्रशांति (Calm)
  - 4. संकुचन (Cramp)

Question ID : 4244292181  
Status : Answered  
Chosen Option : 3

Q.2 Which figure will replace the question mark (?) in the following figure series?

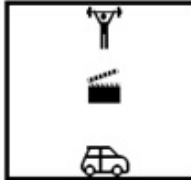


Ans

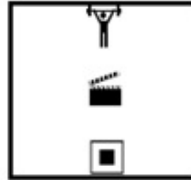
✗ 1.



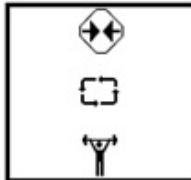
✗ 2.



✓ 3.



✗ 4.



Question ID : 4244292193

Status : Answered

Chosen Option : 4

Q.3 The difference between simple interest and compound interest on a certain sum of money for 2 years at 10% per annum is ₹732. Find the sum.

Ans ✗ 1. ₹72,300

✗ 2. ₹70,320

✓ 3. ₹73,200

✗ 4. ₹70,230

Question ID : 4244292188

Status : Answered

Chosen Option : 3

**Q.4** Select the set in which the numbers are related in the same way as are the numbers of the following set.

(4, 19, 41)

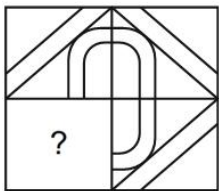
- Ans** ✓ 1. (8, 67, 137)  
✗ 2. (5, 22, 47)  
✗ 3. (11, 124, 215)  
✗ 4. (6, 39, 75)

Question ID : 4244292186

Status : Answered

Chosen Option : 2

**Q.5** Select the option figure that can replace the question mark (?) in the given figure to complete the pattern.



**Ans**

- ✓ 1.
- ✗ 2.
- ✗ 3.
- ✗ 4.

Question ID : 4244292196

Status : Answered


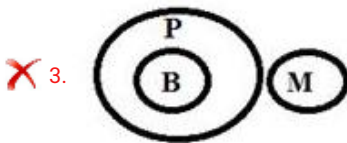
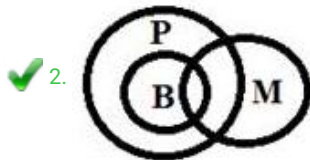
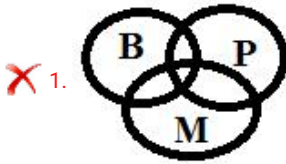
Chosen Option : 1

**Q.6** Read the below statements disregarding commonly known facts, and then from the given four options, identify the Venn diagram that correctly represents the statements.

Statements:

- 1) Some Markers (M) are Boards (B).
- 2) All the Boards (B) are Printers (P).

Ans



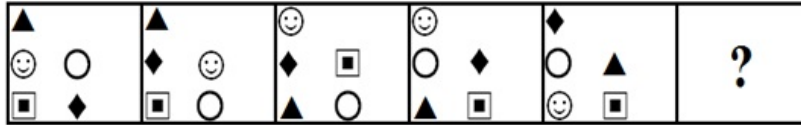
Question ID : 4244292204

Status : Answered

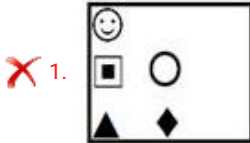
Chosen Option : 2



Q.7 Which figure will replace the question mark (?) in the following figure series?



Ans



Question ID : 4244292194  
 Status : Answered  
 Chosen Option : 3

Q.8 If SEIZURE is coded as 8231592 and HARMONY is coded as 1919144132, then how will PRODUCE be coded?

- Ans
- ✓ 1. 1194235242
  - ✗ 2. 11122234569
  - ✗ 3. 11912236245
  - ✗ 4. 1194232425

Question ID : 4244292182  
 Status : Answered  
 Chosen Option : 1

Q.9 Which number will replace the question mark (?) in the following series?

1, 5, 10, 27, 58, 153, 340, ?

- Ans
- 1. 803
  - 2. 830
  - 3. 903
  - 4. 930

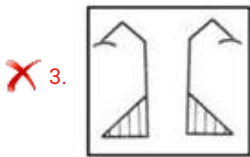
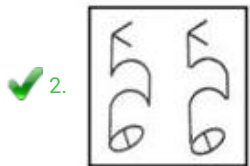
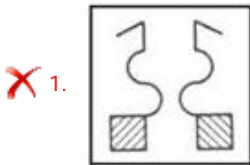
Question ID : 4244292183

Status : **Not Attempted and Marked For Review**

Chosen Option : --

Q.10 Three of the following four figures are alike in a certain way and one is different. Select the odd one.

Ans



Question ID : 4244292190

Status : **Answered**

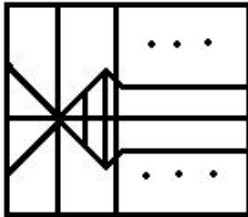
Chosen Option : 2

Q.11 Select the option in which the given figure is embedded (rotation is NOT allowed).

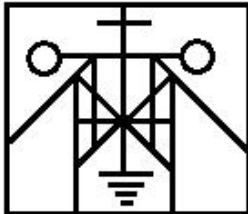


Ans

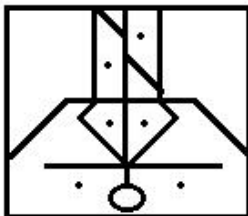
1.



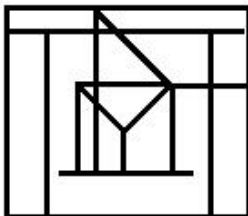
2.



3.



4.

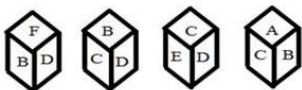


Question ID : 4244292199

Status : Answered

Chosen Option : 2

Q.12 Four different positions of the same dice are shown. Select the letter on the face opposite to the face showing 'B'.



Ans

1. E

2. F

3. D

4. C

Question ID : 4244292201

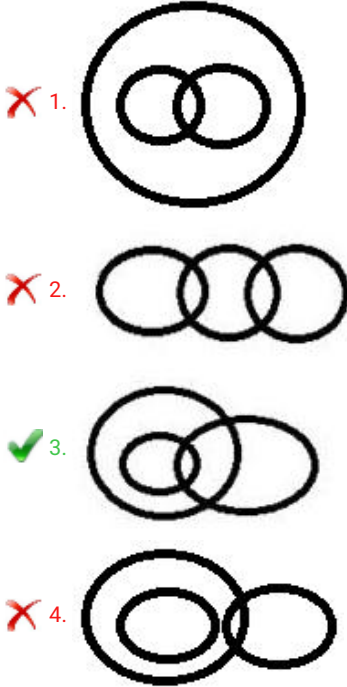
Status : Answered

Chosen Option : 1

**Q.13** Select the Venn diagram that best illustrates the relationship between the following classes.

Men, Pharmacists, Brothers

Ans



Question ID : 4244292203  
Status : Answered  
Chosen Option : 3

**Q.14** Select the option that is related to the third number in the same way as the second number is related to the first number.

15 : 90 :: 18 : ?

- Ans  1. 126  
 2. 146  
 3. 164  
 4. 261

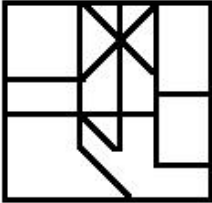
Question ID : 4244292185  
Status : Answered  
Chosen Option : 1

Q.15 Select the option in which the given figure is embedded (rotation is NOT allowed).

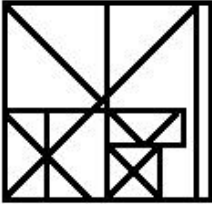


Ans

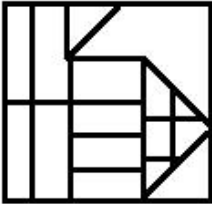
1.



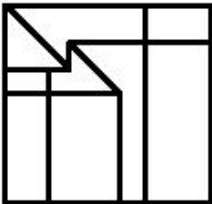
2.



3.



4.

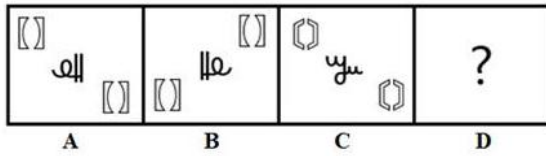


Question ID : 4244292200

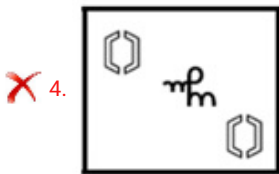
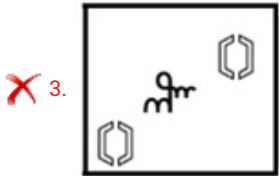
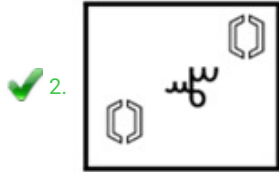
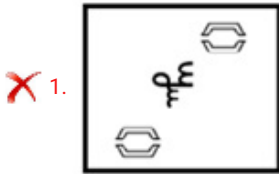
Status : Answered

Chosen Option : 1

Q.16 Select the option that is related to figure C in the same way as figure B is related to figure A.

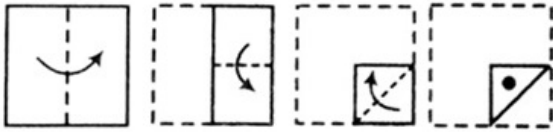


Ans

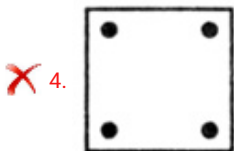
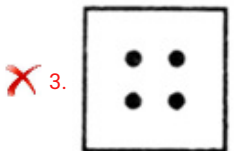
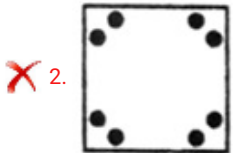
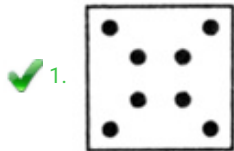


Question ID : 4244292191  
 Status : Answered  
 Chosen Option : 2

Q.17 A paper is folded and cut as shown below. How will it appear when unfolded?



Ans



Question ID : 4244292198  
 Status : Answered  
 Chosen Option : 1

Q.18 Which number will replace the question mark (?) in the following series?

3, 7, 18, 40, 75, 127, 198, 292, 415, 569, ?

- Ans
- ✗ 1. 706
  - ✗ 2. 860
  - ✗ 3. 806
  - ✓ 4. 760

Question ID : 4244292184  
 Status : Answered  
 Chosen Option : 2

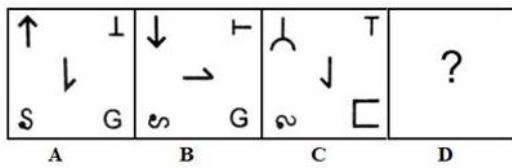
**Q.19** Select the option that is related to the third word in the same way as the second word is related to the first word.

Insects : Entomology :: Rocks : ?

- Ans
- 1. Topology
  - 2. Lithology
  - 3. Cytology
  - 4. Odontology

Question ID : 4244292180  
 Status : Answered  
 Chosen Option : 2

**Q.20** Select the option that is related to figure C in the same way as figure B is related to figure A.



Ans

- 1.
- 2.
- 3.
- 4.

Question ID : 4244292192  
 Status : Answered  
 Chosen Option : 4





**Q.23** Three of the following four figures are alike in a certain way and one is different. Select the odd one.

**Ans**

1.



2.



3.



4.



Question ID : 4244292189

Status : Answered

Chosen Option : 4

**Q.24** Which two signs should be interchanged to make the given equation correct?

$$176 - 16 + 33 \times 6 \div 200 = 9$$

**Ans**

1. + and  $\div$

2. - and  $\div$

3.  $\div$  and  $\times$

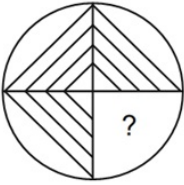
4. + and  $\times$

Question ID : 4244292187

Status : Answered

Chosen Option : 2

**Q.25** Select the option figure that can replace the question mark (?) in the given figure to complete the pattern.



**Ans**


1.



2.



3.



4.



Question ID : 4244292195

Status : Answered

Chosen Option : 3

Section : Part C- Numerical Ability

**Q.1** A loan is to be returned in two equal annual instalments. If the rate of interest is 10% p.a., compounded yearly, and each instalment is ₹3,872, then the total interest charged in this instalment scheme is:

**Ans**

1. ₹1,024

2. ₹1,020

3. ₹980

4. ₹1,050

Question ID : 4244292215

Status : Not Attempted and  
Marked For Review

Chosen Option : --

**Q.2** A and B started simultaneously towards each other from places X and Y, respectively. After meeting at point M on the way, A and B took 3.2 hours and 7.2 hours, to reach Y and X, respectively. The time (in hours) taken by them to reach point M was:

- Ans**
- 1. 4.8
  - 2. 5
  - 3. 4
  - 4. 5.2

Question ID : 4244292217  
Status : Answered  
Chosen Option : 3

**Q.3** The average of 14 numbers is 73.5. If two numbers 60 and 63 are replaced by 58 and 70 and one more number  $x$  is included, then the average of the numbers now increases by 1.5. What is the value of  $x$  ?

- Ans**
- 1. 91
  - 2. 85
  - 3. 88
  - 4. 82

Question ID : 4244292207  
Status : Answered  
Chosen Option : 1

**Q.4** The income of A is 60% more than the income of B, and the income of C is 45% less than the total income of A and B. By what percentage is C's income less than that of A's?

- Ans**
- 1. 11.225
  - 2. 11.88
  - 3. 10.5
  - 4. 10.625

Question ID : 4244292209  
Status : Answered  
Chosen Option : 4

**Q.5** A certain number of students from school A appeared in an examination and 65% of them passed. 100% more students than those in school A, appeared in the same examination from school B. If 75% of the total students that appeared from schools A and B passed, then what is the percentage of students who failed from school B?

- Ans**
- 1. 25
  - 2. 20
  - 3. 18
  - 4. 15

Question ID : 4244292210  
Status : Answered  
Chosen Option : 2

**Q.6** The rate of interest on a sum for the first 3 years is 8% p.a., for the next 4 years it is 10% p.a., and for the period beyond 7 years it is 16% p.a. If a person gets ₹11,340 as simple interest after 10 years, how much money did he invest?

- Ans**
- 1. ₹11,150
  - 2. ₹12,140
  - 3. ₹10,140
  - 4. ₹10,125

Question ID : 4244292214  
Status : Answered  
Chosen Option : 4

**Q.7** The curved surface area of a right circular cylinder is  $1320 \text{ cm}^2$  and the radius of its base is 10.5 cm. The volume (in  $\text{cm}^3$ ) of the cylinder is: (Take  $\pi = \frac{22}{7}$ )

- Ans**
- 1. 6930
  - 2. 6908
  - 3. 6798
  - 4. 6732

Question ID : 4244292219  
Status : Answered  
Chosen Option : 1

**Q.8** A sum of ₹16,380 is divided among A, B, C, and D such that the ratio of the shares of A and B is 1 : 3, that of B and C is 2 : 5, and that of C and D is 2 : 3. The share (in ₹) of C is:

- Ans**
- 1. 5,400
  - 2. 8,100
  - 3. 6,300
  - 4. 4,500

Question ID : 4244292213  
Status : Answered  
Chosen Option : 1

**Q.9** Let  $x$  be the least number of 4-digits which when divided by 12, 15, 20 and 27 leaves, in each case, a remainder 7. What is the sum of the digits of  $x$  ?

- Ans**
- 1. 13
  - 2. 16
  - 3. 17
  - 4. 11

Question ID : 4244292205  
Status : Answered  
Chosen Option : 2

Q.10 The value of  $(0.5\bar{8} \div 0.\overline{53}) \times \frac{5}{33} + \frac{10}{21} \div 1\frac{1}{14}$  of  $\frac{5}{3} - \frac{5}{3} \times \frac{1}{10}$  is:

- Ans
- 1.  $\frac{13}{30}$
  - 2.  $\frac{3}{5}$
  - 3.  $\frac{3}{10}$
  - 4.  $\frac{4}{15}$

Question ID : 4244292208

Status : Answered

Chosen Option : 3

Q.11 The marked price of an article is ₹240. It is sold by giving a discount of 10% on the marked price. If the profit is 8%, then what is the cost price of the article?

- Ans
- 1. ₹175
  - 2. ₹210
  - 3. ₹180
  - 4. ₹200

Question ID : 4244292211

Status : Answered

Chosen Option : 4

Q.12 A and B can do a piece of work in 10 days and 15 days, respectively. They work together for 4 days. The remaining work is completed by C alone in 12 days. C alone will complete  $\frac{4}{9}$  part of the original work in:

- Ans
- 1. 24 days
  - 2. 12 days
  - 3. 20 days
  - 4. 16 days

Question ID : 4244292216

Status : Answered

Chosen Option : 4

**Q.13** Roshan bought 36 kg sugar for ₹1,620. He sold it at a profit equal to the selling price of 6 kg of it. His selling price per kg, is:

- Ans
- 1. ₹51
  - 2. ₹50
  - 3. ₹54
  - 4. ₹52

Question ID : 4244292212

Status : Answered

Chosen Option : 3

**Q.14** In a division sum, the divisor is 18 times the quotient and 9 times the remainder. If the remainder is 26, then the dividend is:

- Ans
- 1. 3055
  - 2. 3072
  - 3. 3068
  - 4. 3042

Question ID : 4244292206

Status : Answered

Chosen Option : 3

**Q.15** The perimeter of a rhombus is 148 cm and one of its diagonals is 70 cm. Its area is equal to the area of a rectangle whose sides are in the ratio 7 : 3. The longer side of the rectangle is:

- Ans
- 1.  $7\sqrt{10}$  cm
  - 2.  $8\sqrt{5}$  cm
  - 3.  $4\sqrt{5}$  cm
  - 4.  $14\sqrt{10}$  cm

Question ID : 4244292218

Status : Answered

Chosen Option : 4

Section : Part D- Computer Proficiency

**Q.1** Which of the following keyboard shortcuts is used to activate a browser tab to the left of the current tab in a Chrome browser?

- Ans
- 1. Ctrl + Page up
  - 2. Alt + Page down
  - 3. Alt + Left arrow
  - 4. Ctrl + Right arrow

Question ID : 4244292229

Status : Answered

Chosen Option : 3

Q.2 What will be the result of the following MS Excel formula?

=EVEN(3) + ODD(8)

- Ans
- 1. 9
  - 2. 14
  - 3. 13
  - 4. 11

Question ID : 4244292222  
Status : Not Answered  
Chosen Option : --

Q.3 Consider a formula "=B2+4" in cell A1. If cell A1 is copied and pasted into D4, then what will be the formula in D4?

- Ans
- 1. =B4+7
  - 2. =D4+4
  - 3. =E5+4
  - 4. =B2+4

Question ID : 4244292221  
Status : Answered  
Chosen Option : 2

Q.4 In MS Excel, the 'Zoom' option appears in the:

- Ans
- 1. title bar
  - 2. formula bar
  - 3. status bar
  - 4. horizontal scroll bar

Question ID : 4244292220  
Status : Answered  
Chosen Option : 3

Q.5 Which of the following appears as a part of the 'Paragraph' command group within the Home menu in recent versions of MS Word, such as Word 2016?

- Ans
- 1. Copy
  - 2. Replace
  - 3. Bullets
  - 4. Format Painter

Question ID : 4244292223  
Status : Answered  
Chosen Option : 3



Q.6 State whether the following statements related to MS Word are true or false?

(i) In Landscape orientation, the height of a page is larger than its width.

(ii) In Portrait orientation, the width of a page is larger than its height.

- Ans
- 1. (i) True, (ii) False
  - 2. (i) False, (ii) False
  - 3. (i) False, (ii) True
  - 4. (i) True, (ii) True

Question ID : 4244292226

Status : Answered

Chosen Option : 2

Q.7 Which of the following keyboard shortcuts can be used to insert a hyperlink in an MS Word document?

- Ans
- 1. Alt + K
  - 2. Alt + L
  - 3. Ctrl + K
  - 4. Ctrl + L

Question ID : 4244292225

Status : Answered

Chosen Option : 4

Q.8 Which of the following notations is generally used to represent an IP address in an understandable format?

- Ans
- 1. Binary notation
  - 2. Hexadecimal notation
  - 3. Octal notation
  - 4. Dotted-decimal notation

Question ID : 4244292228

Status : Answered

Chosen Option : 2

Q.9 While printing an MS Word document, we can set the number of copies to be printed. By default, you will have \_\_\_\_\_ copy/copies of the document.

- Ans
- 1. one
  - 2. two
  - 3. three
  - 4. eight


Question ID : 4244292224

Status : Answered

Chosen Option : 1

**Q.10** Which of the following protocols pulls messages from the email server?

**Ans**

 1. HTTP

 2. POP

 3. SMTP

 4. Both, SMTP and POP

Question ID : 4244292227

Status : **Answered**

Chosen Option : 4