

100 Questions

Que. 1 In the following question, select the related word from the given alternatives.

Shirt : Garment :: Necklace : ?

1. Neck
2. Ornament
3. Beads
4. Round

Que. 2 In the following question, select the related letters from the given alternatives.

TULIP : ZAROV :: SCALP : ?

1. HRIGV
2. YIGRV
3. PRIHV
4. VHPRG

Que. 3 In the following question, select the related number from the given alternatives.

5 : 25 :: 10 : ?

1. 96
2. 50
3. 42
4. 121

Que. 4 In the following question, select the odd word from the given alternatives.

1. Paragraph
2. Word
3. Sentence
4. Circle

Que. 5 In the following question, select the odd letters from the given alternatives.

1. ZUPK
2. TOJD
3. WRMH
4. VQLG

Que. 6 In the following question, select the odd number pair from the given alternatives.

1. 10 – 100
2. 12 – 144
3. 13 – 171

Que. 7 In the following question, select the odd number pair from the given alternatives.

- 1. 6361 – 16
- 2. 5921 – 16
- 3. 4361 – 14
- 4. 2963 – 20

Que. 8 How many triangles are there in the given figure?



- 1. 3
- 2. 4
- 3. 5
- 4. 6

Que. 9 How many rectangles are there in the given figure?



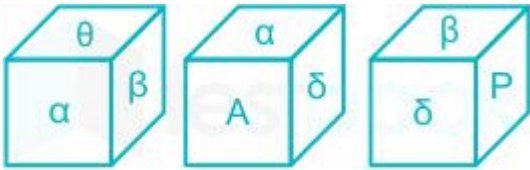
- 1. 11
- 2. 12
- 3. 10
- 4. 13

Que. 10 How many surfaces are there in the given figure?



- 1. 6
- 2. 7
- 3. 8

Que. 11 Three positions of a cube are shown below. What will come opposite to face containing 'α'?



1. β
2. θ
3. P
4. A

Que. 12 From the given answer figures, select the one in which question figure is hidden / embedded.



- 1.
- 2.
- 3.
- 4.

Que. 13 Which answer figure will complete the pattern in the question figure?



- 1.
- 2.
- 3.
- 4.

Que. 14 If a mirror is placed on the line AB, then which of the answer figure is the right mirror image of the given figure?



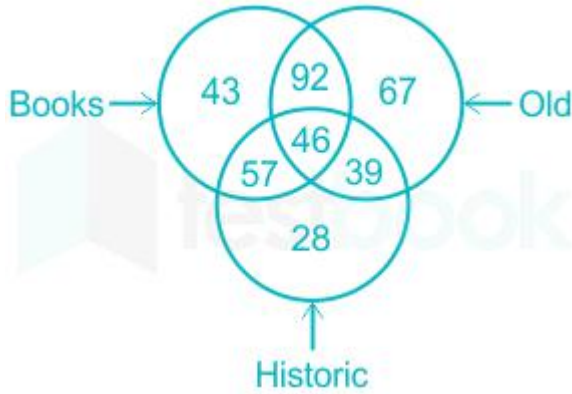
- 1.
- 2.
- 3.
- 4.

Que. 15 In the following question, select the number which can be placed at the sign of question mark (?) from the given alternatives.

2	3	4	25
5	7	2	71
1	5	6	?

1. 31
2. 33
3. 37
4. 43

Que. 16 In the given figure, how many books are either old or historic but not both?



1. 195
2. 131
3. 149
4. 96



Que. 17 Arrange the given words in the sequence in which they occur in the dictionary.

1. Doom
2. Down
3. Drone
4. Drape
5. Ding

1. 51243
2. 51234
3. 52143
4. 52134

Que. 18 Identify the diagram that best represents the relationship among the given classes.

Circle, Square, Triangle

1. 
2. 



Que. 19 In the following question below are given some statements followed by some conclusions. Taking the given statements to be true even if they seem to be at variance from commonly known facts. Read all the conclusions and then decide which of the given conclusion logically follows the given statements.

Statements:

- I. All leaves are green.
- II. Some leaves are hard.

Conclusions:

- I. Some hard are green.
 - II. All green are leaves.
- 1. Only conclusion (I) follows
 - 2. Only conclusion (II) follows
 - 3. Both conclusion follow
 - 4. Neither conclusion (I) nor conclusion (II) follows

Que. 20 In the following question below are given some statements followed by some conclusions. Taking the given statements to be true even if they seem to be at variance from commonly known facts. Read all the conclusions and then decide which of the given conclusion logically follows the given statements.

Statements:

- I. All pink are doors.
- II. All male are doors.

Conclusions:

- I. Some males are pink.
 - II. All doors are pink.
 - III. All pink are males.
- 1. Only conclusion (I) follows
 - 2. Only conclusion (II) follows
 - 3. Only conclusion (II) and (III) follow
 - 4. Neither conclusion follows

Que. 21 Pointing towards a man, a lady said, "He is the son of my husband's brother." How is the lady's husband related to the man?

- 1. Son
- 2. Uncle
- 3. Brother

4. Husband

Que. 22 F is the mother of T. T is the sister of W who is the only son of K. J is the brother of K. How is the mother of W related to K?

1. Mother
2. Sister
3. Wife
4. Niece





Que. 23 On a certain sum at the rate of 10% per annum, the difference between simple interest for 2 years and the simple interest for 3 years is Rs. 54. What is the value (in Rs.) of sum?

1. 540
2. 1080
3. 720
4. 480





Que. 24 P, Q and R can complete a piece of work in 45, 15 and 5 days respectively. In how many days all three together can complete the same work?

1. 45/14
2. 45/13
3. 9/2
4. 11/2





Que. 25 In the given question, there are four figures given out of which three are similar in some manner and one is not like the others. Select the figure which is odd one out.

1. 
2. 
3. 
4. 

Que. 26 In the given question, there are four figures given out of which three are similar in some manner and one is not like the others. Select the figure which is odd one out.

1. 
2. 
3. 
4. 

Que. 27 In the given question, there are four figures given out of which three are similar in some manner and one is not like the others. Select the figure which is odd one out.

1. 
2. 
3. 
4. 

Que. 28 In the following question, select the missing number from the given series.

4, 5, 7, 10, 11, 13, 16, ?

1. 14
2. 17
3. 19
4. 23

Que. 29 In the following question, select the missing number from the given series.

5, 3, 8, 11, 19, ?

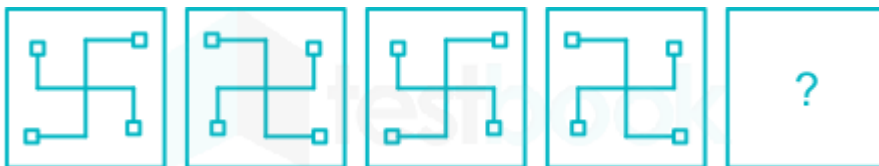
1. 43
2. 37
3. 25
4. 30

Que. 30 In the following question, select the figure which can be placed at the sign of question mark (?) from the given alternatives.

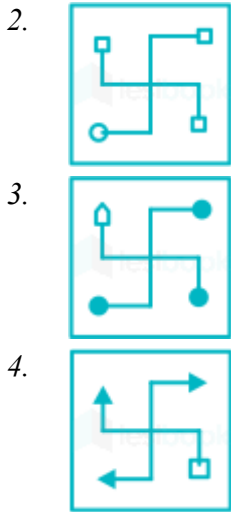


- 1.
- 2.
- 3.
- 4.

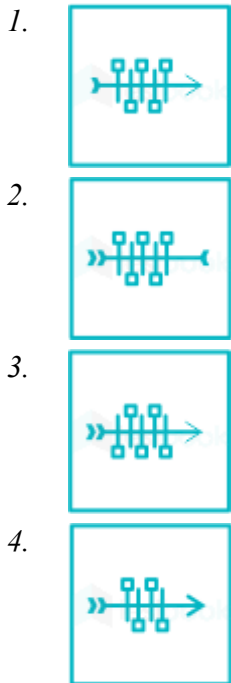
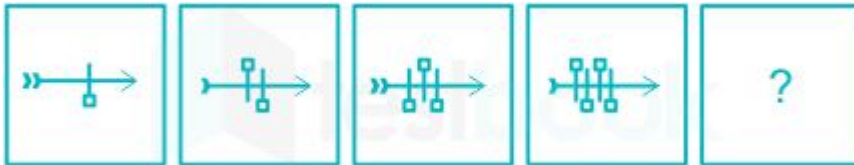
Que. 31 In the following question, select the figure which can be placed at the sign of question mark (?) from the given alternatives.



- 1.



Que. 32 In the following question, select the figure which can be placed at the sign of question mark (?) from the given alternatives.



Que. 33 In a certain code language, “FEARS” is written as “HHC UU”. How is “STAIR” written in that code language?

1. VWLTC
2. CLTUW
3. UWCLT
4. WCTLX

Que. 34 In a certain code language, "ROADS" is written as "57" and "HORN" is written as "55". How is "BLOW" written in that code language?

1. 46
2. 48
3. 47
4. 52

Que. 35 In a certain code language, "TUNES" is written as "16" and "FREEZE" is written as "11". How is "CLIMB" written in that code language?

1. 14
2. 10
3. 12
4. 16

Que. 36 In India, inflation is measured on the basis of _____.

1. Wholesale Price Index
2. Producer Price Index
3. Consumer price index
4. No option is correct

Que. 37 The workforce population includes people aged from _____ years to _____ years.

1. 10, 69
2. 15, 64
3. 21, 55
4. 18, 65

Que. 38 In which type of economy there is neither exports nor imports?

1. Closed
2. Open
3. Mixed
4. Global

Que. 39 Which price is declared by the government every year before the sowing season to provide incentives to the farmers for raising the production of their crops?

1. Maximum Support Price
2. Minimum Support Price
3. Maximum Stock Price
4. Minimum Stock Price

Que. 40 What is an association of workers for the purpose of maintaining or improving the conditions of their employment called as?

1. Federation
2. Trade Union
3. Accord
4. Colony

Que. 41 _____ is the right of a person, party or nation to stop a certain decision or law.

1. Strike
2. Veto
3. Both Strike and Veto
4. Neither Strike nor Veto

Que. 42 Which part of the Indian Constitution deals with the Municipalities?

1. Part IV
2. Part V
3. Part IX A
4. Part X

Que. 43 Anti-defection law is given in which schedule of Indian Constitution?

1. Seventh Schedule
2. Eighth Schedule
3. Ninth Schedule
4. Tenth Schedule

Que. 44 Which among the following is the most frequently mentioned tax in the inscription of Cholas who ruled in Tamil Nadu?

1. Vetti
2. Kadamai
3. Thari
4. Manai

Que. 45 Chahamanas who ruled over the region around Delhi and Ajmer were later known as _____.

1. Chalukyas
2. Chauhans
3. Cholas
4. Chandelas

Que. 46 In which session Sarojini Naidu became the first Indian women president of Indian National Congress?

1. 1922, Gaya
2. 1925, Kanpur
3. 1928, Calcutta

4. 1931, Karachi

Que. 47 The period from 1915-47 in India's Freedom Struggle was termed as _____.

1. Extremist phase
 2. Moderate Phase
 3. Gandhian Phase
 4. No option is correct
-

Que. 48 What is the name of the Arabic book by Al-Biruni?

1. Kitab-ul-Hind
 2. Hindustan-nama
 3. Tarikh-e-Hindustan
 4. Fatawa-e-Hindustani
-

Que. 49 Who started the Shuddhi Movement in India?

1. Subhash Chandra Bose
 2. Swami Dayanand Saraswati
 3. Chadrashekhhar Azad
 4. Raja Ram Mohan Roy
-

Que. 50 The tropic of cancer passes through how many states of India?

1. 6
 2. 7
 3. 8
 4. 9
-

Que. 51 What is the approximate time lag (in hours) from Gujarat to Arunachal Pradesh?

1. 1
 2. 1.5
 3. 2
 4. 2.5
-

Que. 52 Which is NOT a part of the Deccan Plateau in the Northeast India?

1. The Meghalaya plateau
 2. Karbi-Anglong plateau
 3. North Cachar Hills
 4. The Kaimur Hills
-

Que. 53 Which vegetation covers the deltas of the Ganga, the Mahanadi, the Krishna, the Godavari and the Kaveri?

1. Montane Forest
2. Mangrove Forests
3. The Thorn Forests
4. Tropical Deciduous Forest

Que. 54 Anamudi is the highest peak of _____.

1. Anaimalai hills
2. Nilgiri hills
3. Aravalli hills
4. Jaintia hills

Que. 55 Which state is largest producer of jute in India?

1. Bihar
2. Assam
3. Odisha
4. West Bengal

Que. 56 Each centimeter has ten equal divisions called _____.

1. Meter
2. Micrometer
3. Decimeter
4. Millimeter

Que. 57 Translucent objects are the objects through which we _____.

1. Cannot see at all
2. Can see clearly
3. Can see but not very clearly
4. No option is correct

Que. 58 A thin wire that gives off light from the bulb is called _____.

1. Terminal
2. Tip
3. Source
4. Filament

Que. 59 Which among the following is the reproductive part of a plant?

1. Root
2. Stem
3. Flower
4. Fruit

Que. 60 When a disease-carrying microbe enters our body, the body produces _____ to fight the microbe.

1. Antigen
2. Antibodies
3. Antibiotics
4. Anti Allergenic

Que. 61 Which man-made fibre is obtained from wood pulp?

1. Nylon
2. Rayon
3. Silk
4. Polyester

Que. 62 Which chemical is used to test whether substance is acidic or basic?

1. Indicator
2. Promoter
3. Catalyst
4. Neutraliser

Que. 63 Presence of which among the following is essential for rusting?

I. Water (or water vapour)

II. Oxygen

1. Only I
2. Only II
3. Both I and II
4. Neither I nor II

Que. 64 Which is NOT an example of one-sided symbiotic relationship?

1. Cattle egrets and cattle
2. A hermit crab and an empty seashells
3. A spider on a tree
4. Tapeworm in host's stomach

Que. 65 What does the sum total of the populations of the same kind of organisms called?

1. Kingdom
2. Class
3. Phylum
4. Species

Que. 66 Which is a new scheme named 'Saubhagya' to carry out electrification of all households in India?

1. Pradhan Mantri Safal Ujjwal Bhagya Yojana
2. Pradhan Mantri Sahaj Bijli Har Ghar Yojana
3. Pradhan Mantri Samridh Ujala Bhagyashree Yojana
4. No option is correct

Que. 67 The Government of which state will merge its existing seven health schemes to launch a unified scheme – Arogya Bhagya?

1. Karnataka
2. Maharashtra
3. Meghalaya
4. Odisha

Que. 68 Which country's scientists have successfully created the world's shortest x-ray laser pulse?

1. Sweden
2. Bulgaria
3. Norway
4. Switzerland

Que. 69 Which space agency has launched Joint Polar Satellite System-1 into space on November 18, 2017?

1. Indian Space Research Organisation
2. China National Space Administration
3. National Aeronautics and Space Administration
4. Russia State Corporation for Space Activities

Que. 70 India's Sundar Singh Gurjar won Gold medal in which event at World Para Athletics, 2017?

1. Javelin throw
2. Long jump
3. Discus throw
4. High Jump

Que. 71 India's Mithali Raj became first women cricketer to score _____ career runs in Women's One Day International Cricket.

1. 5000
2. 6000
3. 7000
4. 8000

Que. 72 In which country India has designated Zorinpui Land Check post as an authorized immigration check post?

1. Myanmar
2. Bangladesh

3. Bhutan
4. Nepal

Que. 73 What is the name of India-Nepal joint military exercise whose 12th edition was held from 3 to 16 September 2017 in Nepal?

1. Sampriti
2. Surya-kiran
3. Indra
4. Prabal

Que. 74 Author of the novel named 'Lincoln in the Bardo' has won which literary award in 2017?

1. Pulitzer Prize
2. Man Booker Prize
3. European Union Prize
4. Giller Prize

Que. 75 In which field Richard H. Thaler has won 2017 Nobel Prize?

1. Economic Sciences
2. Literature
3. Physics
4. Chemistry

Que. 76 What is the name of Google's digital payment app launched on September 18, 2017?

1. Tez
2. Veg
3. Kranti
4. Bhim

Que. 77 Who is the head of the Economic Advisory Council to the Prime Minister Constituted on September 25, 2017?

1. Ashima Goyal
2. Ratan Watal
3. Bibek Debroy
4. Surjit Bhalla

Que. 78 Which is the 15th country to ratify the Solar Alliance Framework Agreement?

1. Somalia
2. Tuvalu
3. Fiji
4. Guinea

Que. 79 Which is the last country to join the Paris Climate Agreement in November 2017?

1. Fiji
2. Syria
3. Afghanistan
4. Ghana

Que. 80 Which Metro system is the world's first completely green Metro system?

1. Hong Kong Mass Transit Railway
2. Singapore Mass Rapid Transit
3. Delhi Metro Rail Corporation
4. London Underground

Que. 81 On November 1, 2017, the Energy Efficiency Services Limited (EESL), under the Ministry of Power, launched "Creating and Sustaining Markets for Energy Efficiency Project" in partnership with _____.

1. World Wildlife Fund (WWF)
2. Global Environment Facility (GEF)
3. Green Climate Fund (GCF)
4. World Resources Group (WRG)

Que. 82 Who among the following has been re-elected on November 21, 2017 as a member of International Court of Justice?

1. Dalveer Bhandari
2. Hishashi Owada
3. Peter Tomka
4. Ronny Abraham

Que. 83 On November 10, 2017 Audrey Azoulay was appointed as the new Director General of which United Nation body?

1. WHO
2. UNICEF
3. UNDP
4. UNESCO

Que. 84 The ninth BRICS summit, 2017 was organized in which city of China?

1. Suzhou
2. Xian
3. Hongkong
4. Xiamen

Que. 85

Which country is at the top of the eighth edition of the World Giving Index compiled in October, 2017 by the 'Charities Aid Foundation'?

1. United States of America
2. Australia
3. Myanmar
4. China

Que. 86 The sum of a positive number and its cube is 10. What is the value of the number?

1. 1
2. 2
3. 3
4. 4

Que. 87 What is the value of $13 + 23 + \dots + 93$?

1. 477
2. 565
3. 675
4. 776

Que. 88 What is the value of $1 + \frac{2}{1 + \frac{3}{2 + \frac{1}{2}}}$?

1. 10/11
2. 7/11
3. 21/11
4. 12/11

Que. 89 What is the Highest Common Factor of 14, 42 and 84?

1. 2
2. 7
3. 14
4. 1

Que. 90 What is the value of $\frac{(1.27)^2 - (1.05)^2}{0.22}$?

1. 0.22
2. 2.22
3. 2.32
4. 2.42

Que. 91 If 80% of P = 2/5 of Q, then what is P : Q?

1. 2 : 1

2. 1 : 2
3. 1 : 4
4. 4 : 1

Que. 92 The annual income of Rahul and Mohit are in the ratio 17 : 12 and the ratio of their expenditure is 5 : 3. If each of them saves Rs 9000 yearly, then what will be the annual income (in Rs) of Mohit?

1. 24000
2. 21000
3. 22400
4. 34000

Que. 93 12 persons have Rs. 49 on an average. If a person with Rs. 55.5 join them, then what will be the new average (in Rs)?

1. 49.5
2. 50
3. 49.75
4. 50.25

Que. 94 What will be the simple interest (in Rs) on a sum of Rs. 4000 for 6 years at the rate of 8% per annum?

1. 2020
2. 1920
3. 2080
4. 1860

Que. 95 Vyom purchased 30 dozen pens at the rate Rs. 48 per dozen. He sold 10 dozen at 20% profit and the remaining 20 dozen at 10% profit. What is his profit percentage?

1. 13.33
2. 15.17
3. 25
4. 20

Que. 96 The cost price of an article is 64% of the marked price. What will be the gain percentage after allowing a discount of 12% on the marked price?

1. 25
2. 37.5
3. 33.33
4. 40

Que. 97 The ratio of the outer and the inner perimeter of a circular path is 14 : 11. If path is 15 meters wide, then what is the radius (in metres) of the inner circle?

1. 70

2. 33
3. 35
4. 55

Que. 98 A boat covers 20 km upstream and 40 km downstream distance in 4 hours, while it covers 70 km upstream and 60 km downstream distance in 10 hours. What is the speed (in km/hr) of the current?

1. 10
2. 15
3. 5
4. 12.5

Que. 99 P started a business by investing Rs. 60000. After 4 months Q joined the business by Investing Rs. 80000. After 4 more months, R joined the business by investing Rs. 100000. What will be the ratio of profits of P, Q and R at end of 2 years?

1. 9 : 11 : 10
2. 9 : 12 : 10
3. 12 : 14 : 15
4. 9 : 10 : 10

Que. 100 S and V can do a work in 12 days. M and S can do the same work in 16 days. M and V can do the same work in 24 days. In how many days S, V and M together can complete the same work?

1. $32/3$
2. 10
3. $16/3$
4. 11

100 Questions

Que. 1	Correct Option - 2
---------------	--------------------

Que. 2	Correct Option - 2
---------------	--------------------

Que. 3	Correct Option - 2
---------------	--------------------

Que. 4	Correct Option - 4
---------------	--------------------

Que. 5	Correct Option - 2
---------------	--------------------

Que. 6	Correct Option - 3
---------------	--------------------

Que. 7	Correct Option - 2
---------------	--------------------

Que. 8	Correct Option - 3
---------------	--------------------

Que. 9	Correct Option - 4
---------------	--------------------

Que. 10	Correct Option - 2
----------------	--------------------

Que. 11	Correct Option - 3
----------------	--------------------

Que. 12	Correct Option - 2
----------------	--------------------

Que. 13	Correct Option - 2
----------------	--------------------

Que. 14	Correct Option - 4
----------------	--------------------

Que. 15	Correct Option - 1
----------------	--------------------

Que. 16	Correct Option - 3
----------------	--------------------

Que. 17	Correct Option - 1
----------------	--------------------

Que. 18	Correct Option - 2
----------------	--------------------

Que. 19	Correct Option - 1
----------------	--------------------

Que. 20	Correct Option - 4
----------------	--------------------

Que. 21	Correct Option - 2
----------------	--------------------

Que. 22	Correct Option - 3
----------------	--------------------

Que. 23	Correct Option - 1
----------------	--------------------

Que. 24	Correct Option - 2
----------------	--------------------

Que. 25	Correct Option - 2
----------------	--------------------

Que. 26	Correct Option - 3
Que. 27	Correct Option - 1
Que. 28	Correct Option - 2
Que. 29	Correct Option - 4
Que. 30	Correct Option - 4
Que. 31	Correct Option - 1
Que. 32	Correct Option - 3
Que. 33	Correct Option - 3
Que. 34	Correct Option - 4
Que. 35	Correct Option - 3
Que. 36	Correct Option - 3
Que. 37	Correct Option - 2
Que. 38	Correct Option - 1
Que. 39	Correct Option - 2
Que. 40	Correct Option - 2
Que. 41	Correct Option - 2
Que. 42	Correct Option - 3
Que. 43	Correct Option - 4
Que. 44	Correct Option - 1
Que. 45	Correct Option - 2
Que. 46	Correct Option - 2
Que. 47	Correct Option - 3
Que. 48	Correct Option - 1
Que. 49	Correct Option - 2
Que. 50	Correct Option - 3
Que. 51	Correct Option - 3

Que. 52	Correct Option - 4
Que. 53	Correct Option - 2
Que. 54	Correct Option - 1
Que. 55	Correct Option - 4
Que. 56	Correct Option - 4
Que. 57	Correct Option - 3
Que. 58	Correct Option - 4
Que. 59	Correct Option - 3
Que. 60	Correct Option - 2
Que. 61	Correct Option - 2
Que. 62	Correct Option - 1
Que. 63	Correct Option - 3
Que. 64	Correct Option - 4
Que. 65	Correct Option - 4
Que. 66	Correct Option - 2
Que. 67	Correct Option - 1
Que. 68	Correct Option - 4
Que. 69	Correct Option - 3
Que. 70	Correct Option - 1
Que. 71	Correct Option - 2
Que. 72	Correct Option - 1
Que. 73	Correct Option - 2
Que. 74	Correct Option - 2
Que. 75	Correct Option - 1
Que. 76	Correct Option - 1
Que. 77	Correct Option - 3
Que. 78	

	Correct Option - 4
Que. 79	Correct Option - 2
Que. 80	Correct Option - 3
Que. 81	Correct Option - 2
Que. 82	Correct Option - 1
Que. 83	Correct Option - 4
Que. 84	Correct Option - 4
Que. 85	Correct Option - 3
Que. 86	Correct Option - 2
Que. 87	Correct Option - 1
Que. 88	Correct Option - 3
Que. 89	Correct Option - 3
Que. 90	Correct Option - 3
Que. 91	Correct Option - 2
Que. 92	Correct Option - 1
Que. 93	Correct Option - 1
Que. 94	Correct Option - 2
Que. 95	Correct Option - 1
Que. 96	Correct Option - 2
Que. 97	Correct Option - 4
Que. 98	Correct Option - 3
Que. 99	Correct Option - 4
Que. 100	Correct Option - 1